







2D Shape Practice!

Name: _____

Complete the chart for the shapes below.

Shape	Name	Number of Sides	Number of Vertices
			
			
			
			
			
			

Try this funny 2D math! Answer with the correct shape name.

triangle + triangle = _____

rhombus + triangle = _____

pentagon + triangle = _____

rectangle + square = _____

Circle TRUE or FALSE. Use the pattern blocks to help you find the answer.

(1) You can make a hexagon with 2 trapezoids. TRUE FALSE

(2) You can make a rectangle with 2 squares. TRUE FALSE

(3) You can make a hexagon with 2 triangles and 1 rhombus. TRUE FALSE